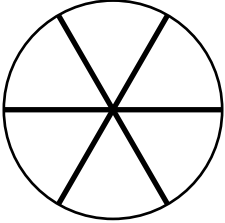
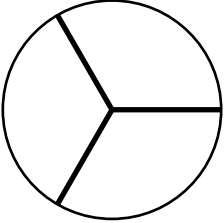
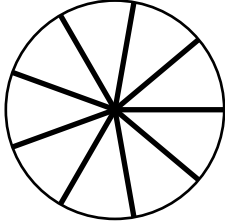
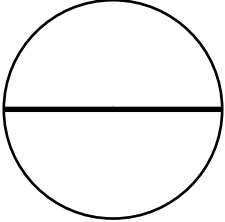

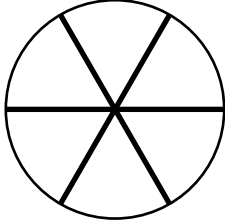
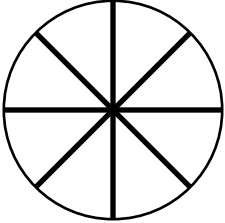
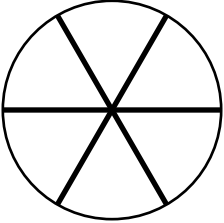
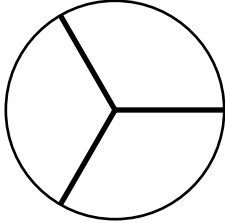
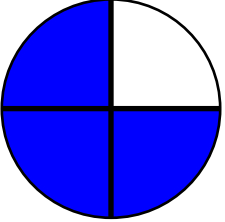
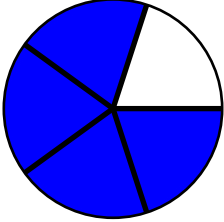
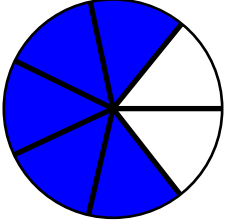
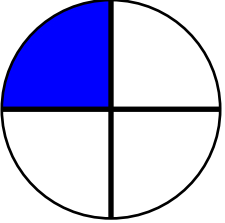
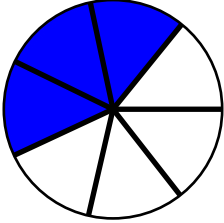
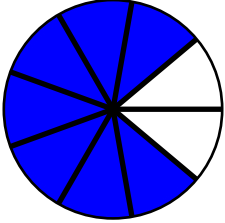
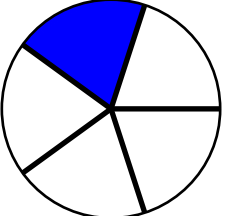
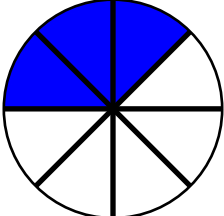
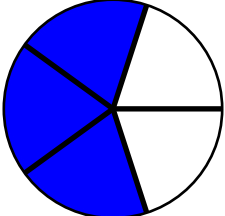


Fractions worksheet

Name: _____ Date: _____

Grade: _____ Score: _____

Write the fraction value or shade the area

$\frac{5}{6}$		$\frac{2}{3}$		$\frac{4}{9}$	
$\frac{1}{2}$		$\frac{6}{8}$		$\frac{3}{6}$	
$\frac{7}{8}$		$\frac{1}{6}$		$\frac{1}{3}$	
	_____		_____		_____
	_____		_____		_____
	_____		_____		_____

Fractions worksheet

Name: _____ Date: _____

Grade: _____ Score: _____

Write the fraction value or shade the area

